


Name: _____

Score: _____


Drawing Line

Draw a line through the point with the given slope.


1) Slope = $\frac{3}{4}$




2) Slope = $-\frac{1}{4}$




3) Slope = $\frac{2}{7}$




4) Slope = $\frac{1}{6}$




5) Slope = $\frac{1}{2}$




6) Slope = 0




7) Slope = $-\frac{1}{3}$




8) Slope = Undefined




9) Slope = $-\frac{3}{5}$




10) Slope = Undefined




11) Slope = $-\frac{3}{4}$




12) Slope = $\frac{5}{2}$




13) Slope = 0



14) Slope = $-\frac{4}{5}$



15) Slope = 0



16) Slope = Undefined

